





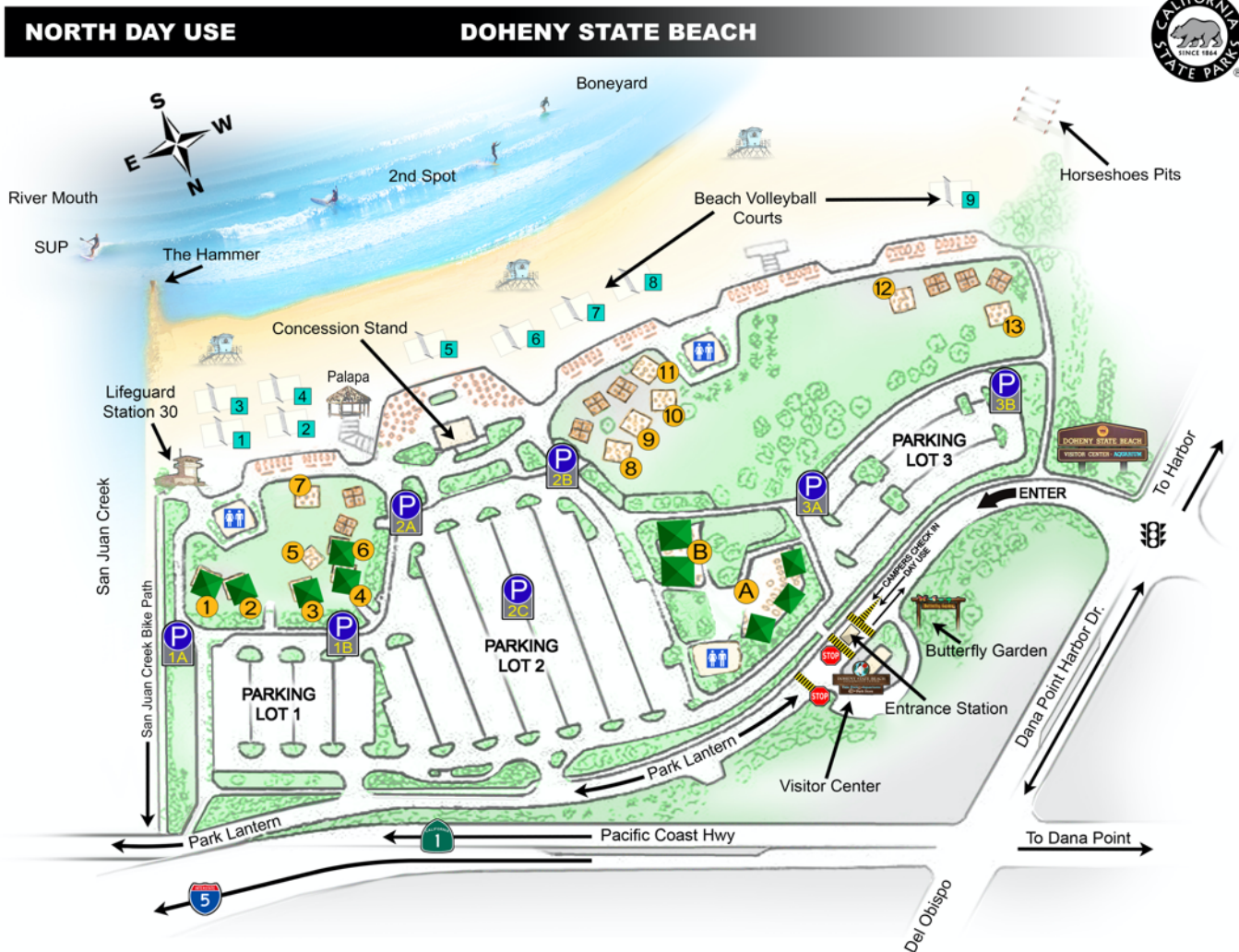
HOW ARE YOUR DOHENY MAP READING SKILLS

Use the map below to help you answer these questions.

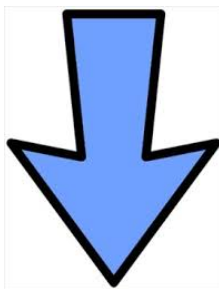


1. If you are at volleyball court #7 and you want to go to the Visitor Center, which direction should you go? (north, east, south or west)
2. If you are playing horse shoes and suddenly think you want a hot dog and a milk shake, where would you need to go and what direction would you travel?
3. There is a landmark in front of the lifeguard station that marks the dividing line between where paddle boarders (SUP) can ride waves and where surfers can use their surfboards. What is that landmark?
4. Dad and mom are taking us to see the Butterfly Garden. We're riding in our cool new car. Which parking lot would get us closest to the Butterfly Garden?
5. I want to ride my bike along a safe route up to San Juan Capistrano. I know there is a good bike path that starts somewhere in the park. What's the name of the bike path and the building that's nearest to the start of it?
6. What does this symbol on the map mean? 
7. There are 3 main surfing spots at Doheny. What are their names?
8. If I were standing by the lifeguard tower nearest San Juan Creek and looking at whales directly offshore, what direction would I be looking?
9. What does this symbol mean? 
10. The map does not show the campground, but I know it's on the east side of San Juan Creek. What road should I take to get there?
11. What do you think the difference is between picnic areas 1, 2, 3, 4, 5, 6 and 7, and picnic areas 8, 9, 10, 11, 12 and 13?
12. What's the name of the main road on the northwest side of the park that goes to the Harbor?
13. If you were riding your bike and going to leave the park at the entrance to ride to the harbor, which direction would you turn onto the street outside the park (left or right) and which direction would you be going (north, east, south or west) ?
14. What two directions does Pacific Coast Highway run?

HOW ARE YOUR DOHENY MAP READING SKILLS



Find the answers on the next page.



HOW ARE YOUR DOHENY MAP READING SKILLS

Answers

1. North
2. The Concession Stand. You would go east or northeast. (Both answers are correct)
3. The Hammer
4. Parking Lot 3, unless you use the small lot by the Visitor Center. (Both answers are correct)
5. San Juan Creek Bike Path / Lifeguard Station 30
6. It's where the machines that issue the parking tickets are located.
7. River Mouth, 2nd Spot and Boneyard
8. South
9. Traffic Signal
10. Park Lantern
11. 1 through 7 are covered with shade tarps. 8 through 13 do not have shade tarps. Or, 1 through 7 are on the east side of the park, and 8 through 13 are on the west side of the park.
12. Dana Point Harbor Dr.
13. Left / West
14. West and East

